


**Example 2 :** Consider numbers from 53 to 57.



- (a) 54 comes after 53
- (b) 55 comes between 54 and 56.
- (c) 54, 55 and 56 come between 53 and 57.
- (d) 56 comes before 57.
- (e) 54, 55, 56 and 57 come after 53.
- (f) 53, 54, 55 and 56 are before 57.










### Exercise

1. Look at the following numbers and fill in the blanks.

- 11   12   13   14   15   16   17   18   19   20


- (a) 15 comes before ..... 16 .....
- (b) 17 comes after ..... 16 .....
- (c) 11 comes before ..... 12 .....
- (d) 19 comes after ..... 18 .....
- (e) 14 comes between ..... 13 ..... and ..... 15 .....
- (f) ..... 12 ....., ..... 13 ..... and ..... 14 ..... come between 11 and 15.

2. What comes just before :

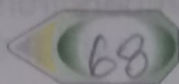
- (a)  24      (b)  73      (c)  11
- (d)  49      (e)  10      (f)  57
- (g)  60      (h)  35      (i)  62

### 3. What comes after ?


(a) 15




(b) 67



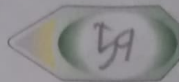
(c) 13




(d) 96



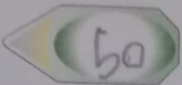
(e) 58




(f) 81




(g) 49



(h) 90

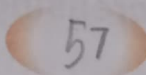


(i) 62




### 4. What comes in between ?

(a) 56



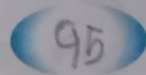
58

(b) 21



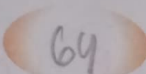
23

(c) 44



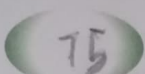
46

(d) 63




65

(e) 74



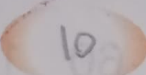
76

(f) 12




14

(g) 9



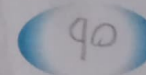
11

(h) 97



99

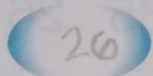
(i) 89



91

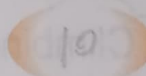
### 5. Write the number that comes before, after or in between.

(a)

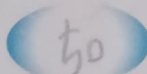


27

(b) 9




(c) 49



51

(d)

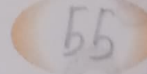


78

(e) 69

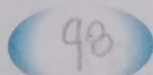


(f) 54



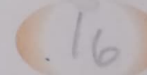
56

(g)

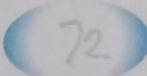


99

(h) 15

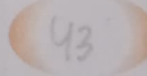


(i) 71



73

(j)



44