







(h) How many children love to play guitar and flute ?

3500

The table below shows the games which are played in a school. Answer the following questions after observing the pictograph carefully.

Cricket	
Carrom	
Chess	
Badminton	
Basket ball	

Each () represents 50 students.

- (a) How many students love to play a game ?
- (b) How many students love to play chess ?
- (c) Which game is the most popular among children ?
- (d) Which game is the least popular among children ?
- (e) How many students play carrom and chess ?
- (f) How many students love to play badminton ?
- (g) How many students love to play basketball and badminton ?
- (h) How many children play cricket ?

800
50
Cricket
chess
150
200
350
300