



Exercise



Date _____


Page _____

4. Fill in the blanks.

- 1) An atlas is a book of maps.
- 2) The ratio of distance on a map to actual ~~distance~~ distance is known as the scale of the map.
- 3) On a map, high mountains are shown in brown.
- 4) On a map, the use of the colour blue shows water.
- 5) Shapes ~~and~~ signs used to represent features on a map are called symbols.
- 6) On a map drawn to a scale of 1 centimetre : 100 kilometres, a distance of five centimetres on the map means an ~~actual~~ actual distance of _____.
- 7) If north is at the top in a map, west is to the left.

B. Match the columns.

- | | |
|--|--------------------------------|
| 1) Arrow marked N on map | Green |
| 2) 1 centimetre : 1 Kilometre | Bridge |
| 3)  | North |
| 4) Plains | Map scale |
| 5)  | Boundary between two countries |

 Multiple choice questions

1) Which of these maps will always have some errors?

a. map of your house

b. map of your school

c. map of your neighbourhood

d. map of the world

2) What does a political map show?

a. features such as mountains, plains and rivers

b. roads, railway and airline routes

✓ boundaries of countries, states and important cities

d. number of seats won by political parties in an election

3) On a map, 1000 km is shown as 1 cm. The scale of the map is:

✓ a. 1000 kilometre : 1 centimetre

b. 1 centimetre : 1000 kilometre

c. 100 kilometre : 1 centimetre

d. 1 centimetre : 100 kilometre

4) Blue colour in a map always shows.

a. plain land b. hills ✓ water bodies d. mossy land

5) Which of these symbols represents a boundary between countries?

a. - - - - - ✓ b. — • — • — • — • — • — c. — • — • — d. = = =