




















3. What comes after ?

- (a) 15  (b) 67  (c) 13 
- (d) 96  (e) 58  (f) 81 
- (g) 49  (h) 90  (i) 62 

4. What comes in between ?

- (a) 56  58 (b) 21  23 (c) 44  46
- (d) 63  65 (e) 74  76 (f) 12  14
- (g) 9  11 (h) 97  99 (i) 89  91

5. Write the number that comes before, after or in between.

- (a)  27 (b) 9 
- (c) 49  51 (d)  78
- (e) 69  (f) 54  56
- (g)  99 (h) 15 
- (i) 71  73 (j)  44