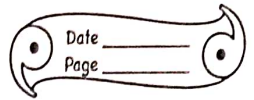


REPRODUCTION IN HUMANS

HOME ASSIGNMENT

02/08/21
HW



Q-1 Draw diagram of female reproductive system.

Ans Done in the next page - -

Q-2 Differentiate between Spermatogenesis and Oogenesis.

Ans Spermatogenesis

* The production of sperms from spermatogonia is called spermatogenesis.

* Occurs in testes.

* Millions of sperm are produced everyday.

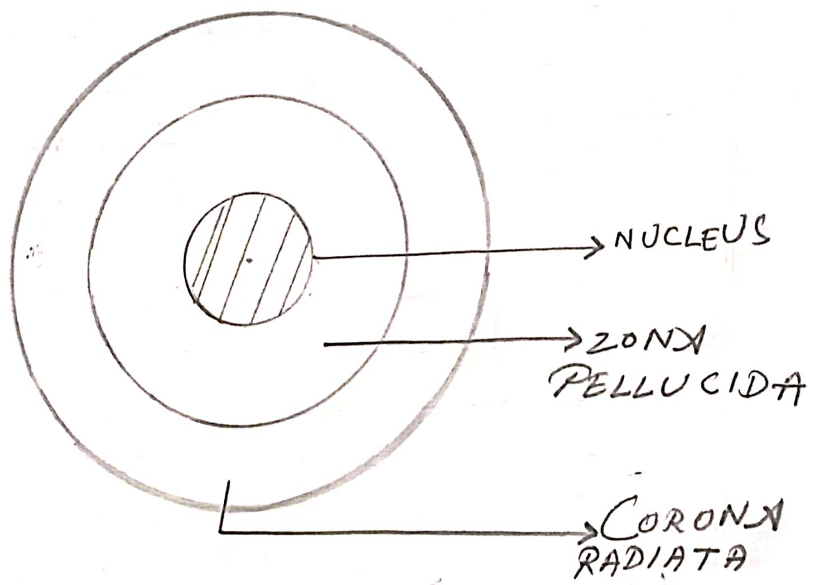
Oogenesis

* The production of egg from oogonia is called Oogenesis.

* Occurs inside the ovary.

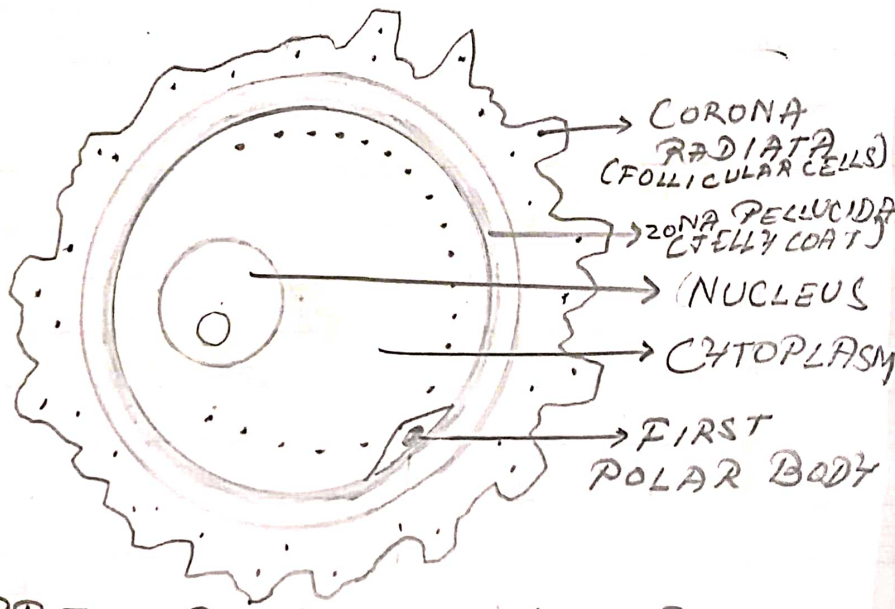
* One ovum is released per month.

DIAGRAMS :-



3 LAYERS OF HUMAN OVUM

①



LABELLED DIAGRAM OF HUMAN OVUM (EGG)