


EXERCISE 17(A)

1 The table below represents the favourite fast foods of children. Read carefully and answer the questions given below.

Pizza	IIII
Burger	IIII III
Sandwich	IIII
Noodles	IIII I
Pasta	II

- (a) Which food is the most popular among the students ? Burger
- (b) Which is the least popular food among the students ? Pasta
- (c) How many children are represented in the table altogether ? 25
- (d) Number of children who like noodles is 6 .
- (e) How many children like pizza and burger ? 13
- (f) How many children like sandwich and pasta ? 6
- (g) Number of children who like noodles and pizza is 11 .

2 The following pictograph shows the weekly sale of shakes and juices at a juice corner. Read and answer the questions carefully.





[Each glass represents 20 glasses of juice and shake.]

- (a) What is the weekly sale of shakes at the juice corner? 320 glasses
- (b) Which juice or shake is the most popular? chocolate shake
- (c) What is the total sale of mixed fruit juice and orange juice together? 260
- (d) Which juice or shake is the least popular? strawberry shake
- (e) How many glasses of banana shake are sold in a week? 100
- (f) What number of glasses of strawberry shake are sold in a week? 60
- (g) How many glasses of chocolate shake and pineapple juice are sold? 240
- (h) What is the sale of pineapple juice? 80






3 The pictograph below shows the musical instruments which students play in a music school. Answer the following questions after observing the pictograph carefully.

Guitar	
Piano	
Flute	
Tabla	
Harmonium	

Scale :  = 500 children ;  = 250 children

- (a) How many students are there in the music school ? 8750
- (b) How many children like to play guitar ? 2750
- (c) What is the number of students who love to play harmonium ? 1500
- (d) Which instrument is the most popular ? Guitar
- (e) Which instrument is the least popular ? Flute
- (f) How many children like to play flute and tabla ? 2000
- (g) What is the number of children who love to play piano and harmonium ? 3500
- (h) How many children love to play guitar and flute ? 3000

4 The table below shows the games which are played in a school. Answer the following questions after observing the pictograph carefully.

Cricket	
Carrrom	
Chess	
Badminton	
Basket ball	

Each () represents 50 students.

- (a) How many students love to play a game ?
- (b) How many students love to play chess ?
- (c) Which game is the most popular among children ?
- (d) Which game is the least popular among children ?
- (e) How many students play carrom and chess ?
- (f) How many students love to play badminton ?
- (g) How many students love to play basketball and badminton ?
- (h) How many children play cricket ?

800

50

CRICKET

Chess

150

200

350

300