

Thu  
12.05.2021



## Chapter - 2 Maps

Date \_\_\_\_\_  
Page \_\_\_\_\_

Q) fill in the blanks:

- 1) An atlas is a book of maps.
- 2) The ratio of distance on a map to actual distance is known as the scale.
- 3) On a map, the use of the colour blue shows water bodies.
- 4) On a map, high mountains are shown in dark brown.
- 5) Shapes or signs used to represent features on a map are called symbol.
- 6) On a map drawn to a scale of 1 centimetre : 100 kilometres, a distance of five centimetre on the map means an actual distance of 500 kilometre.
- 7) If north is at the top in a map, west is to the left.

### B) Match the columns.

- |  |                                   |
|--|-----------------------------------|
| 1) Arrow marked N on map   | a) Green                          |
| 2) 1 centimetre : 1 kilometre  | b) Bridge                         |
| 3) Plains  | c) North                          |
| 4)  | d) Map scale                      |
| 5)  | e) Boundary between two countries |

### Multiple choice questions

- 1) Which of these maps will always have some errors?
- a) map of your house      b) map of your school
- c) map of your neighbourhood      d) map of the world

2) What does a political map show?

a) features such as mountains, plains and rivers.

b) Roads, railway and airline routes

c) ~~on a~~ Boundaries of countries, states and important cities.

d) number of seats won by political parties in an election.

3) On a map, 1000 km is shown 1 cm. The scale of the map is:



a) 1000 kilometre : 1 centimetre ~~or~~ 1 centimetre : 1000 kilometre

c) 100 kilometre : 1 centimetre ~~or~~ 1 centimetre : 100 kilometre.

4) Blue colour in a map always shows:

a) plain land b) hills c) water bodies d) marshy land.

5) Which of these symbols represents a boundary between countries?

- a)  b) 
- c)  d) 