


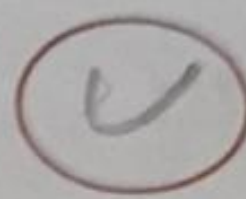
Exercise

1. Tick (✓) the object which has more capacity in each group.


(a)



(b)



(c)



(d)



2. Consider the following :



1



2



3



4



5



6

(a) Arrange the above in the order of their increasing capacity, by putting their numbers in boxes.

1

2

5

3

4

6

(b) Which vessel has the greatest capacity? 6

(c) Which vessel has the least capacity? 1