











Exercise

1. Look at the following numbers and fill in the blanks.



- (a) 15 comes before ...14.....
(b) 17 comes after ...18.....
(c) 11 comes before ...10.....
(d) 19 comes after ...20.....
(e) 14 comes between ...13..... and ...15.....
(f) ...12....., ...13..... and ...14..... come between 11 and 15.

2. What comes just before :

- (a)  24 (b)  73 (c)  11
(d)  49 (e)  10 (f)  57
(g)  60 (h)  35 (i)  62